
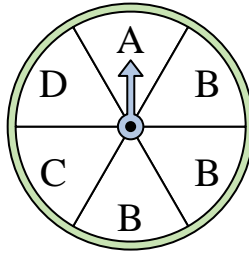


Solve each problem.

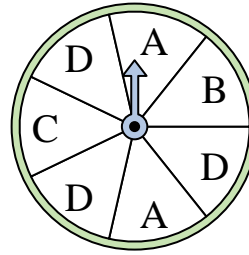
- 1) Which number is the spinner most likely to land on?



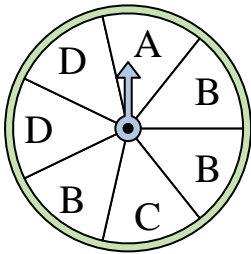
- 2) Which letter is the spinner most likely to land on?



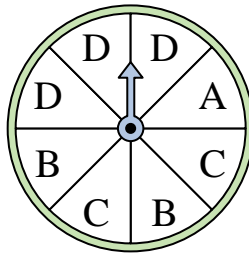
- 3) Which two letters is the spinner equally likely to land on?



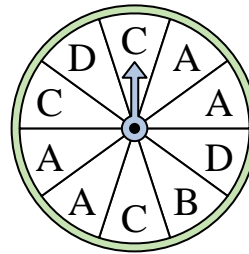
- 4) Which two letters is the spinner equally likely to land on?




- 5) Which two letters is the spinner equally likely to land on?




- 6) Which letter is the spinner least likely to land on?



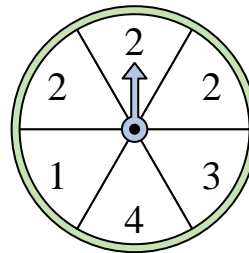
- 7) Which number is the spinner least likely to land on?



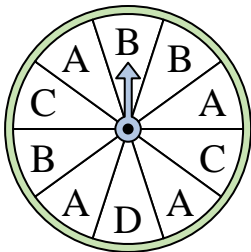
- 8) Which number is the spinner least likely to land on?



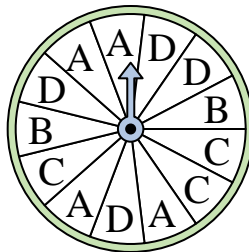
- 9) Which number is the spinner most likely to land on?



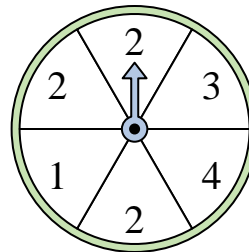
- 10) Which letter is the spinner most likely to land on?



- 11) Which letter is the spinner least likely to land on?



- 12) Which number is the spinner most likely to land on?


**Answers**

1. _____
2. _____
3. _____
4. _____
5. _____
6. _____
7. _____
8. _____
9. _____
10. _____
11. _____
12. _____

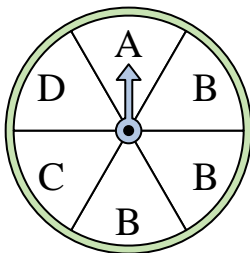


Solve each problem.

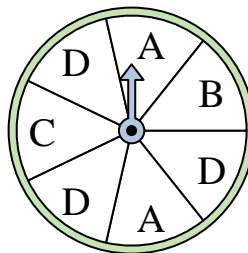
- 1) Which number is the spinner most likely to land on?



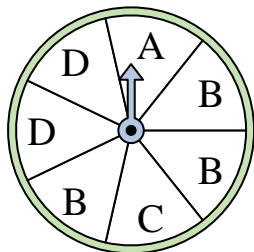
- 2) Which letter is the spinner most likely to land on?



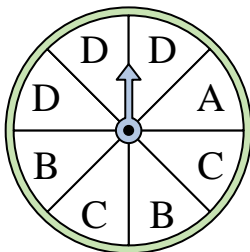
- 3) Which two letters is the spinner equally likely to land on?



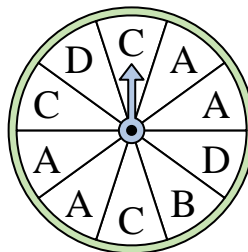
- 4) Which two letters is the spinner equally likely to land on?




- 5) Which two letters is the spinner equally likely to land on?




- 6) Which letter is the spinner least likely to land on?



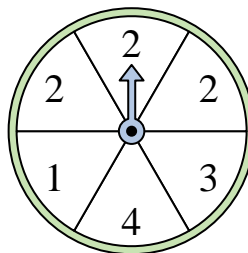
- 7) Which number is the spinner least likely to land on?



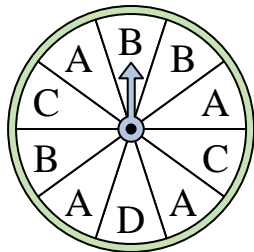
- 8) Which number is the spinner least likely to land on?



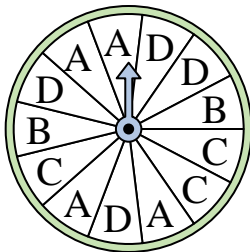
- 9) Which number is the spinner most likely to land on?



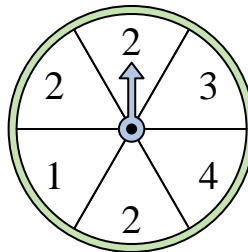
- 10) Which letter is the spinner most likely to land on?



- 11) Which letter is the spinner least likely to land on?



- 12) Which number is the spinner most likely to land on?

**Answers**

1. **3**
2. **B**
3. **B & C**
4. **A & C**
5. **B & C**
6. **B**
7. **4**
8. **2**
9. **2**
10. **A**
11. **B**
12. **2**